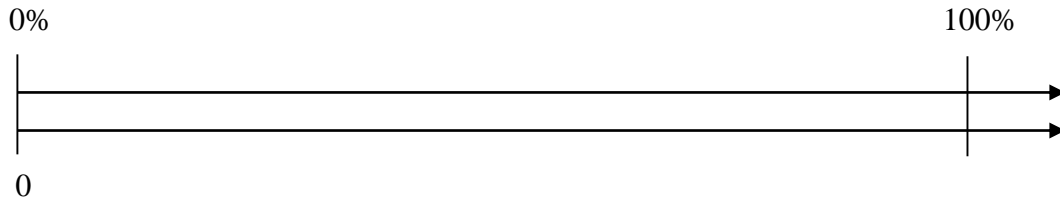
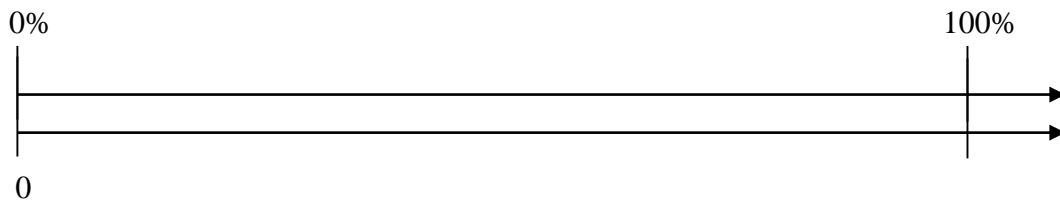


## Double Number Lines Practice

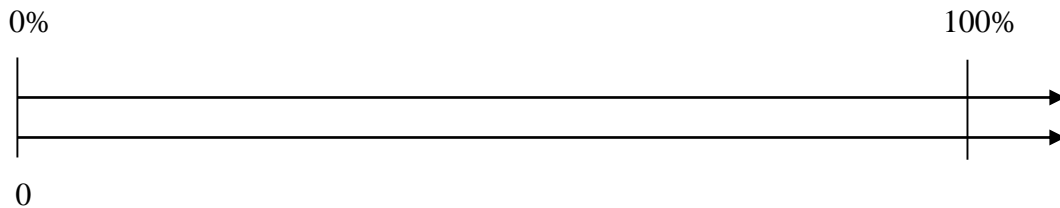
1. Find 25% of 800.



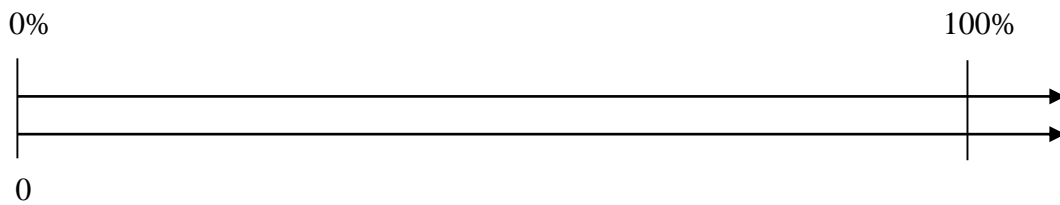
2. If 300 is 80% of a number, what is the original number?



3. What is 30% of 70?



4. Abram was in a contest shooting baskets. He made 20% of his shots. He took a total of 240 shots in the competition. How many baskets did he make?



5. Marta spent \$630 on a new sound system which was 75% of the money she saved for summer. How much money did she have saved for the summer before this purchase?

