

Name: _____ Class: _____

WORK SPACE

1. What is $\frac{24}{64}$ as a percent?

- A** 0.375% **C** 37.5%
B 3.75% **D** 375%

2. If Marie receives $\frac{3}{7}$ of her store's profits, what percent of the store's profit does she receive?

- A** 14% **C** 37%
B 23% **D** 43%

3. How is $\frac{1}{5}$ written as a percent?

- A** 0.2% **C** 5%
B 0.5% **D** 20%

4. The Crystal Clear Window Washing Company washed $\frac{1}{5}$ of the windows in a high-rise building on Monday, $\frac{1}{4}$ on Tuesday, and $\frac{3}{8}$ on Wednesday.

What percentage of the windows in the building were NOT washed after the three days?

- A** 17.5% **C** 67%
B 33% **D** 82.5%

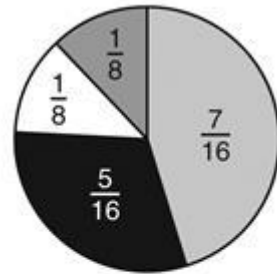
5. What is $\frac{18}{25}$ written as a percent?





- A** 18% **C** 54%
B 36% **D** 72%

6. A travel company made this circle graph to show how they spent their advertising monies last year.

WORK SPACE

Advertising Budget



LEGEND	
	Papers/Magazines
	Radio/Television
	Mail
	Other

What percentage of their advertising budget was spent on Radio/Television advertising?

- A** $\frac{5}{16}\%$ **C** 3.125%
B 0.3125% **D** 31.25%

7. Which percent is equivalent to $4\frac{5}{8}$?

- A** 4.58% **C** 458%
B 4.625% **D** 462.5%

8. What is $\frac{7}{1000}$ written as a percent?

- A** 0.007% **C** 0.7%
B 0.07% **D** 7%

9. One-fourth of Jody's class will NOT be able to attend an upcoming field trip. What percent of the class will be attending the field trip?

- A** 4% **C** 75%
B 25% **D** 96%